



Let Us Try


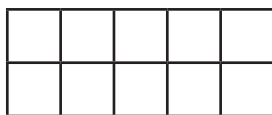
- A. Color the blocks to tell how many are they altogether. Use your **blue** and **green** crayons. Write the sum on the line. The first one has been done for you.



$$3 + 8 = \underline{11}$$





$$4 + 9 = \underline{\hspace{2cm}}$$



$$7 + 7 = \underline{\hspace{2cm}}$$



$$9 + 6 = \underline{\hspace{2cm}}$$



$$5 + 7 = \underline{\hspace{2cm}}$$